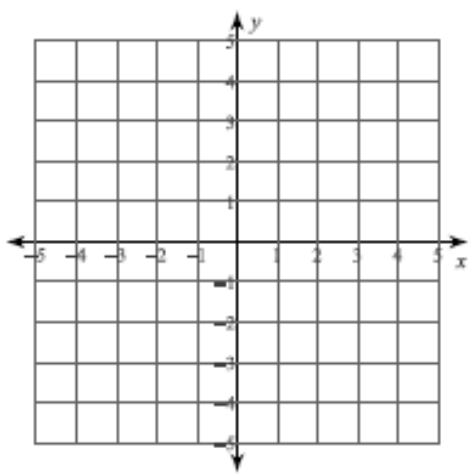


Name: _____
Date: _____
Class: _____
HW #: _____

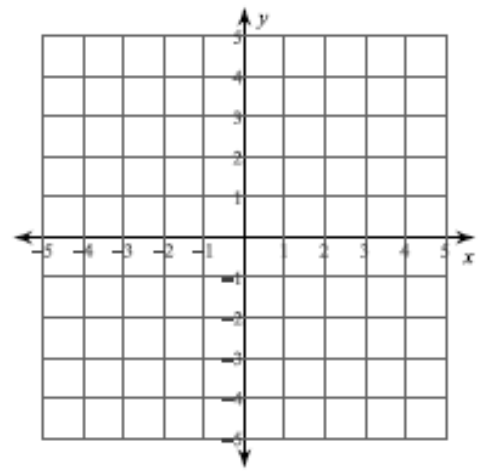
Solve each system by graphing.

1) $y = -\frac{5}{3}x + 3$

$y = \frac{1}{3}x - 3$

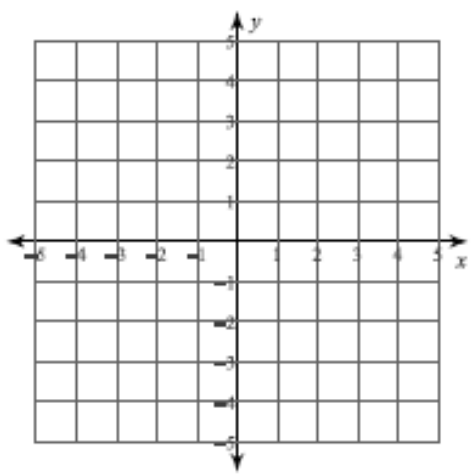


2) $y = 4x + 3$
 $y = -x - 2$

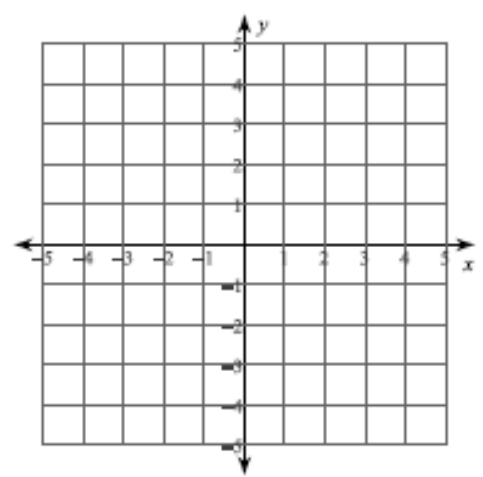


3) $y = -\frac{1}{2}x - 1$

$y = \frac{1}{4}x - 4$



4) $y = -1$
 $y = -\frac{5}{2}x + 4$



Name: _____

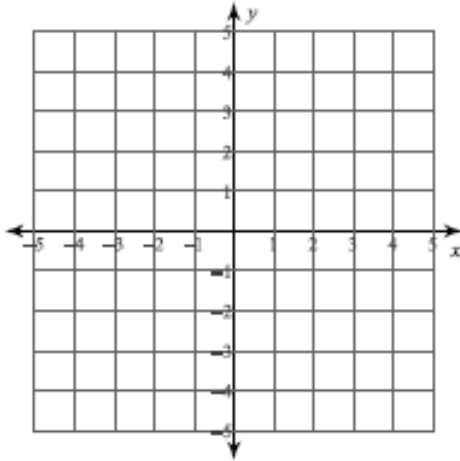
Date: _____

Class: _____

HW #: _____

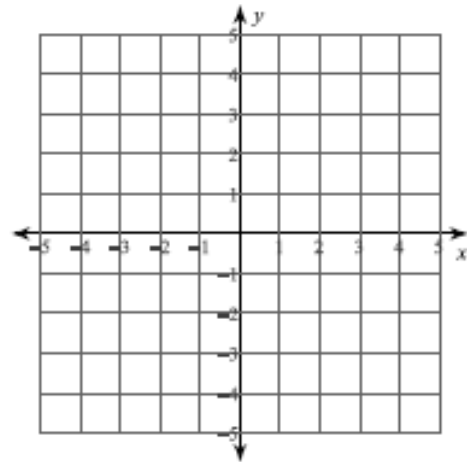
5) $y = 3x - 4$

$$y = -\frac{1}{2}x + 3$$



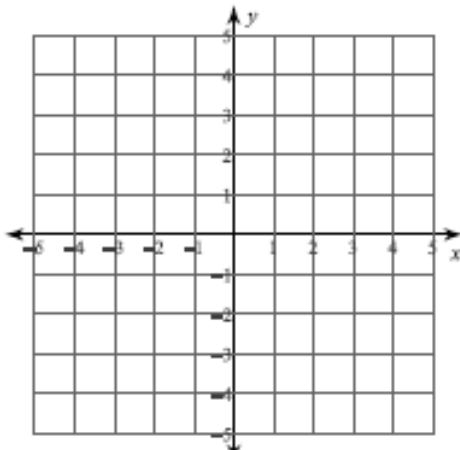
6) $y = -2x + 2$

$$y = -2x - 2$$



7) $y = -\frac{1}{2}x - 2$

$$y = -\frac{3}{2}x + 2$$



8) $y = \frac{1}{3}x - 3$

$$y = -x + 1$$

